



केन्द्रीय रिजर्व पुलिस बल CENTRAL RESERVE POLICE FORCE

Test Date	11/03/2023
Test Time	9:00 AM - 10:30 AM
Subject	Head Constable Ministerial

Section : Hindi Language

Q.1 वाक्य विन्यास की दृष्टि से शुद्ध वाक्य का चयन कीजिए।

- Ans
- A. इलाहाबाद से प्रतापगढ़ तक लगता है बस से कितना भाड़ा?
 - B. बस से लगता है कितना भाड़ा इलाहाबाद से प्रतापगढ़ तक?
 - C. इलाहाबाद से प्रतापगढ़ तक बस से कितना भाड़ा लगता है?
 - D. बस से कितना भाड़ा लगता है तक इलाहाबाद से प्रतापगढ़?

INDIA

Question ID : 630680177090

Status : Not Answered

Chosen Option : --

Q.2 निम्न में से विभाजक समानाधिकरण समुच्चयबोधक अव्यय शब्द है।

- Ans
- A. किंतु
 - B. एवं
 - C. अतएव
 - D. किंवा

Question ID : 630680177113

Status : Not Answered

Chosen Option : --

Q.3 'इन' प्रत्यय युक्त शब्द से वाक्य पूर्ण कीजिए।
_____ का सम्मान करना चाहिए।

- Ans
- A. चौबाइन
 - B. मचारिन
 - C. बबुआइन
 - D. ललाइन

Question ID : 630680179321
Status : Not Answered
Chosen Option : --

Q.4 उपरोक्त लोकोक्ति का सही प्रयोग किस वाक्य में हुआ है?
नंगा क्या नहाए और क्या निचोड़े:

- Ans
- A. मूर्ख को चारों ओर से फायदा हुआ; सच में नंगा क्या नहाए और क्या निचोड़े।
 - B. मूर्ख नौकर ने धनी बनने के लिए काफी प्रयास किया पर असफल रहा। क्योंकि नंगा क्या नहाए और क्या निचोड़े।
 - C. नंगा क्या नहाए और क्या निचोड़े क्योंकि नया पुराने से अधिक प्रभावशाली होता है।
 - D. अकिंचन सब – कुछ कर सकता है पर पढ़ा – लिखा व्यक्ति नहीं कर सकता क्योंकि नंगा क्या नहाए और क्या निचोड़े।

Question ID : 630680179306
Status : Not Answered
Chosen Option : --

Q.5 इस लोकोक्ति का अर्थ कौन – से विकल्प में है ?
चर्सी यार किसके, दम लगाई खिसके

- Ans
- A. भाग्यहीन व्यक्ति को सफलता नहीं मिलती।
 - B. स्वार्थी व्यक्ति किसी का साथ नहीं देता।
 - C. संगत के अनुरूप वस्तुएँ जँचती हैं।
 - D. शांत स्वभाव का व्यक्ति सबको हरा देता है।

Question ID : 630680179307
Status : Not Answered
Chosen Option : --

Q.6 निम्न विकल्पों में से उपयुक्त ऊनवाचक शब्द चयन कर वाक्य में रिक्त स्थान को भरिए।
बछड़े की _____ टूट गई।

- Ans
- A. अंतड़ी
 - B. अगाड़ी
 - C. टंगड़ी
 - D. पिछाड़ी

Question ID : 630680179326
Status : Not Answered
Chosen Option : --

Q.7 संभाव्य भविष्यत काल का वाक्य पहचानिए।

- Ans A. क्या वे मेरी बात सुनेंगे ?
 B. जहाँ तुम जाइएगा वहाँ मैं भी जाऊँगा।
 C. आप वहाँ न जाओ।
 D. आज शायद पानी बरसे।

Question ID : 630680179345
Status : Not Answered
Chosen Option : --

Q.8 निम्न वाक्य में उपयुक्त शब्द चयन कर प्रयोग कीजिए।
नायिका सोलह _____ कर आयी।

- Ans A. ठाट
 B. सजावट
 C. वेश
 D. शृंगार

Question ID : 630680179317
Status : Not Answered
Chosen Option : --

Q.9 कौन – से विकल्प में 'कामदेव' के पर्यायवाची शब्द लिखे गए है?

- Ans A. आत्मभू,विधाता, चतुरानन
 B. गजवदन, विनायक, गणपति
 C. मन्मथ, पंचशर, अनंग
 D. गिरीश, नीलकंठ, हर

Question ID : 630680179287
Status : Not Answered
Chosen Option : --

Q.10 निम्न वाक्य में रेखांकित पद की वर्तनी ठीक कीजिए।
एक अच्छी गृहणी के द्वारा घर ठीक से चलता है।

- Ans A. ग्रहिणी
 B. गृहिणी
 C. गृहणी
 D. गृहीणी

Question ID : 630680179299
Status : Not Answered
Chosen Option : --

Q.11 विकल्पों में से उपयुक्त उपसर्ग युक्त शब्द छॉटकर वाक्य पूर्ण कीजिए।
आजाद भारत माता के सच्चे _____ थे।

- Ans A. सपूत
 B. सुबुद्धि
 C. सुचेत
 D. सहृदय

Question ID : 630680179337
Status : Not Answered
Chosen Option : --

Q.12 निम्न विकल्पों में से भाववाचक संज्ञा शब्द छॉटकर वाक्य पूर्ण कीजिए।
सरकार से उसे _____ मिली।

- Ans A. मनौती
 B. आसर्ि
 C. संयुर्ि
 D. स्वीकृति

Question ID : 630680179323
Status : Not Answered
Chosen Option : --

Q.13 वाक्य विन्यास की दृष्टि से शुद्ध वाक्य का चयन कीजिए।

- Ans A. मैं चेष्टा करूँगा कि समय पर आपके पास पहुँच जाऊँ।
 B. मैं चेष्टा करूँगा कि पहुँच जाऊँ आपके पास समय पर।
 C. आपके पास पहुँच जाऊँ समय पर मैं चेष्टा करूँगा कि।
 D. समय पर चेष्टा करूँगा कि पहुँच जाऊँ आपके पास मैं।

Question ID : 630680177091
Status : Not Answered
Chosen Option : --

Q.14 वर्तनी की दृष्टि से दिए गए वाक्य का कौन-सा शब्द अशुद्ध है।
विश्वविद्यालय के कुलपति कार्यक्रम के मुख्य अतिथी थे।

- Ans A. कुलपति
 B. विश्वविद्यालय
 C. कार्यक्रम
 D. अतिथी

Question ID : 630680177055
Status : Not Answered
Chosen Option : --

Q.15 कौन – सा वाक्य अकर्मक क्रिया हेतु गलत है ?

- Ans A. लड़के ने पुस्तक पढ़ी।
 B. शिक्षक ने छात्रों को हँसाया।
 C. सिपाही सरदार बनाया गया।
 D. लड़कों ने वहाँ बैठे हैं।

Question ID : 630680179361

Status : Not Answered

Chosen Option : --

Q.16 निम्न में से कौन-सा वाक्य संदिग्ध भूत का उदाहरण है।

- Ans A. रूस ने यूक्रेन पर बम गिरा दिया।
 B. रूस ने यूक्रेन पर बम गिराया है।
 C. रूस ने यूक्रेन पर बम गिराया था।
 D. रूस ने यूक्रेन पर बम गिराया होगा।

Question ID : 630680177109

Status : Not Answered

Chosen Option : --

Q.17 नीचे दिए गए अशुद्ध वाक्य को शुद्ध कीजिए।
में सूई, कंघी और दर्पण और पुस्तकें मोल लिए।

- Ans A. मैंने सूई, कंघी, दर्पण और पुस्तकें मोल लिया।
 B. मैंने सूई, कंघी, दर्पण और पुस्तकें मोल लीं।
 C. मैं सूई, कंघी, दर्पण और पुस्तक मोल लीं।
 D. मैंने सूई, कंघी, दर्पण और पुस्तकों मोल लिया।

Question ID : 630680179335

Status : Not Answered

Chosen Option : --

Q.18 निम्नलिखित में से कौन-सा विलोम युग्म असुमेलित है।

- Ans A. तप्त – शीतल
 B. तरल – ठोस
 C. तरुण – वृद्ध
 D. तर – गीला

Question ID : 630680177050

Status : Not Answered

Chosen Option : --

Q.19 'यमुनोत्री से यमुना निकलती है।' वाक्य में कारक है।

- Ans A. करणकारक
 B. अपादानकारक
 C. सम्प्रदानकारक
 D. कर्मकारक

Question ID : 630680177116

Status : Not Answered

Chosen Option : --

Q.20 वाक्य के रिक्त स्थान के लिए उपयुक्त विकल्प चुनकर वाक्य पूर्ण करें।
सही दिशा में _____ करने से कार्य सिद्ध होते हैं।

- Ans A. उधम
 B. उद्यम
 C. उद्योग
 D. प्रहार

Question ID : 630680177082

Status : Not Answered

Chosen Option : --

Comprehension:

गज़ल उर्दू की सर्वाधिक लोकप्रिय विधा है। उर्दू को यह विधा फारसी से प्राप्त हुई। प्रेमिका से बातचीत के रूप में व्याख्यायित होने के कारण गज़ल का प्रधान विषय प्रेम ही माना गया! इसमें इश्क और हुस्न को ही चित्रित करने की ऐसी परंपरा चली कि दीर्घकाल तक गज़ल केवल महबूब और महबूबा की बेफाई के हसीन ख्यालों, मधु-तिक्त दास्तानों और विचारों से ही समृद्ध होती रही। उर्दू शायरों ने गज़ल का संपूर्ण विषय, तत्संबंधी शब्दावली, अप्रस्तुत विधान आदि सभी चीज़ें फारसी साहित्य से ही ग्रहण कर लीं। उर्दू के गज़लकार विदेशी साहित्यिक संपदा के बल पर हिंदुस्तान में अपनी धाक जमाने में इसलिए सफल हुए क्योंकि उनकी गज़लें जिस भाव-संपदा पर आधारित थीं, वह हर देश-काल के मनुष्य की आधारभूत भावनाएँ हैं जिनपर उसकी ज़िंदगी का सुख-दुःख निर्भर करता है। हर व्यक्ति में सौन्दर्य के प्रति स्वाभाविक ललक होती है और हर व्यक्ति में प्रेम करने या किसी का प्रेमास्पद होने की हसरत होती है। उर्दू गज़लों में प्रेम, जीवन की मिठास, कोमलता, समर्पणशीलता, तन्मयता आदि के साथ-साथ विरह की तड़प, उदासी, निराशा, हताशा, प्रतीक्षा, प्रेमिका का अत्याचार, गिला-शिकवा आदि को इतने मार्मिक ढंग से और इतनी विविधता के साथ चित्रित किया गया है कि उनमें हर व्यक्ति को अपनी ज़िंदगी का सुख-दुःख पर्याप्त यथार्थता के साथ मिल जाता है। मौलाना अल्ताफ हुसैन 'हाली' ने गज़ल के वस्तुक्षेत्र को विस्तृत करने के लिए लोगों का ध्यान इस सत्य की ओर आकृष्ट किया कि गज़ल जैसी सशक्त विधा में जीवन की तमाम वास्तविकताओं को मार्मिक ढंग से चित्रित किया जाना चाहिए।

SubQuestion No : 21

Q.21 मौलाना अल्ताफ हुसैन हाली का गज़ल के क्षेत्र में निम्न में से क्या योगदान है?

- Ans A. उन्होंने गज़ल को राजनीतिक विद्रोह का साधन बनाने की चेतना जागृत की।
 B. उन्होंने गज़ल को जीवन की वास्तविकताओं को मार्मिक ढंग से प्रस्तुत करने का साधन बनाने की अनुशंसा की।
 C. उन्होंने गज़ल को ईश्वर की आराधना करने का साधन बनाने की संस्तुति की।
 D. उन्होंने गज़ल को नारी सौंदर्य और रोमानी भावनाओं के प्रस्तुतिकरण का माध्यम ही रहने देने की संस्तुति की।

Question ID : 630680177132

Status : Not Answered

Chosen Option : --

Comprehension:

गज़ल उर्दू की सर्वाधिक लोकप्रिय विधा है। उर्दू को यह विधा फारसी से प्राप्त हुई। प्रेमिका से बातचीत के रूप में व्याख्यायित होने के कारण गज़ल का प्रधान विषय प्रेम ही माना गया! इसमें इश्क और हुस्न को ही चित्रित करने की ऐसी परंपरा चली कि दीर्घकाल तक गज़ल केवल महबूब और महबूबा की बेफाई के हसीन ख्यालों, मधु-तिक्त दास्तानों और विचारों से ही समृद्ध होती रही। उर्दू शायरों ने गज़ल का संपूर्ण विषय, तत्संबंधी शब्दावली, अप्रस्तुत विधान आदि सभी चीज़ें फारसी साहित्य से ही ग्रहण कर ली। उर्दू के गज़लकार विदेशी साहित्यिक संपदा के बल पर हिंदुस्तान में अपनी धाक जमाने में इसलिए सफल हुए क्योंकि उनकी गज़लें जिस भाव-संपदा पर आधारित थीं, वह हर देश-काल के मनुष्य की आधारभूत भावनाएँ हैं जिनपर उसकी ज़िंदगी का सुख-दुःख निर्भर करता है। हर व्यक्ति में सौन्दर्य के प्रति स्वाभाविक ललक होती है और हर व्यक्ति में प्रेम करने या किसी का प्रेमास्पद होने की हसरत होती है। उर्दू गज़लों में प्रेम, जीवन की मिठास, कोमलता, समर्पणशीलता, तन्मयता आदि के साथ-साथ विरह की तड़प, उदासी, निराशा, हताशा, प्रतीक्षा, प्रेमिका का अत्याचार, गिला-शिकवा आदि को इतने मार्मिक ढंग से और इतनी विविधता के साथ चित्रित किया गया है कि उनमें हर व्यक्ति को अपनी ज़िंदगी का सुख-दुःख पर्याप्त यथार्थता के साथ मिल जाता है। मौलाना अल्ताफ हुसैन 'हाली' ने गज़ल के वस्तुक्षेत्र को विस्तृत करने के लिए लोगों का ध्यान इस सत्य की ओर आकृष्ट किया कि गज़ल जैसी सशक्त विधा में जीवन की तमाम वास्तविकताओं को मार्मिक ढंग से चित्रित किया जाना चाहिए।

SubQuestion No : 22

Q.22 निम्न में से हिंदी शब्द है।

- Ans A. शिकवा
 B. संपदा
 C. इश्क
 D. हसरत

Question ID : 630680177134

Status : Not Answered

Chosen Option : --

Comprehension:

गज़ल उर्दू की सर्वाधिक लोकप्रिय विधा है। उर्दू को यह विधा फारसी से प्राप्त हुई। प्रेमिका से बातचीत के रूप में व्याख्यायित होने के कारण गज़ल का प्रधान विषय प्रेम ही माना गया! इसमें इश्क और हुस्न को ही चित्रित करने की ऐसी परंपरा चली कि दीर्घकाल तक गज़ल केवल महबूब और महबूबा की बेफाई के हसीन ख्यालों, मधु-तिक्त दास्तानों और विचारों से ही समृद्ध होती रही। उर्दू शायरों ने गज़ल का संपूर्ण विषय, तत्संबंधी शब्दावली, अप्रस्तुत विधान आदि सभी चीज़ें फारसी साहित्य से ही ग्रहण कर ली। उर्दू के गज़लकार विदेशी साहित्यिक संपदा के बल पर हिंदुस्तान में अपनी धाक जमाने में इसलिए सफल हुए क्योंकि उनकी गज़लें जिस भाव-संपदा पर आधारित थीं, वह हर देश-काल के मनुष्य की आधारभूत भावनाएँ हैं जिनपर उसकी ज़िंदगी का सुख-दुःख निर्भर करता है। हर व्यक्ति में सौन्दर्य के प्रति स्वाभाविक ललक होती है और हर व्यक्ति में प्रेम करने या किसी का प्रेमास्पद होने की हसरत होती है। उर्दू गज़लों में प्रेम, जीवन की मिठास, कोमलता, समर्पणशीलता, तन्मयता आदि के साथ-साथ विरह की तड़प, उदासी, निराशा, हताशा, प्रतीक्षा, प्रेमिका का अत्याचार, गिला-शिकवा आदि को इतने मार्मिक ढंग से और इतनी विविधता के साथ चित्रित किया गया है कि उनमें हर व्यक्ति को अपनी ज़िंदगी का सुख-दुःख पर्याप्त यथार्थता के साथ मिल जाता है। मौलाना अल्ताफ हुसैन 'हाली' ने गज़ल के वस्तुक्षेत्र को विस्तृत करने के लिए लोगों का ध्यान इस सत्य की ओर आकृष्ट किया कि गज़ल जैसी सशक्त विधा में जीवन की तमाम वास्तविकताओं को मार्मिक ढंग से चित्रित किया जाना चाहिए।

SubQuestion No : 23

Q.23 गज़ल का प्रधान विषय प्रेम ही क्यों स्वीकार किया गया?

- Ans A. समाजवादी एवं प्रगतिवादी विचारों को प्रस्तुत करने के कारण।
 B. फारसी साहित्य से प्रभावित होने तथा उससे अपना स्वरूप ग्रहण करने के कारण।
 C. प्रेमिका से बातचीत के रूप में व्याख्यायित होने के कारण।
 D. आध्यत्मिकता एवं रहस्यवाद के प्रस्फुटन के कारण।

Question ID : 630680177131

Status : Not Answered

Chosen Option : --

Comprehension:

गज़ल उर्दू की सर्वाधिक लोकप्रिय विधा है। उर्दू को यह विधा फारसी से प्राप्त हुई। प्रेमिका से बातचीत के रूप में व्याख्यायित होने के कारण गज़ल का प्रधान विषय प्रेम ही माना गया! इसमें इश्क और हुस्न को ही चित्रित करने की ऐसी परंपरा चली कि दीर्घकाल तक गज़ल केवल महबूब और महबूबा की बेफाई के हसीन ख्यालों, मधु-तिक्त दास्तानों और विचारों से ही समृद्ध होती रही। उर्दू शायरों ने गज़ल का संपूर्ण विषय, तत्संबंधी शब्दावली, अप्रस्तुत विधान आदि सभी चीज़ें फारसी साहित्य से ही ग्रहण कर ली। उर्दू के गज़लकार विदेशी साहित्यिक संपदा के बल पर हिंदुस्तान में अपनी धाक जमाने में इसलिए सफल हुए क्योंकि उनकी गज़लें जिस भाव-संपदा पर आधारित थीं, वह हर देश-काल के मनुष्य की आधारभूत भावनाएँ हैं जिनपर उसकी ज़िंदगी का सुख-दुःख निर्भर करता है। हर व्यक्ति में सौन्दर्य के प्रति स्वाभाविक ललक होती है और हर व्यक्ति में प्रेम करने या किसी का प्रेमास्पद होने की हसरत होती है। उर्दू गज़लों में प्रेम, जीवन की मिठास, कोमलता, समर्पणशीलता, तन्मयता आदि के साथ-साथ विरह की तड़प, उदासी, निराशा, हताशा, प्रतीक्षा, प्रेमिका का अत्याचार, गिला-शिकवा आदि को इतने मार्मिक ढंग से और इतनी विविधता के साथ चित्रित किया गया है कि उनमें हर व्यक्ति को अपनी ज़िंदगी का सुख-दुःख पर्याप्त यथार्थता के साथ मिल जाता है। मौलाना अल्ताफ हुसैन 'हाली' ने गज़ल के वस्तुक्षेत्र को विस्तृत करने के लिए लोगों का ध्यान इस सत्य की ओर आकृष्ट किया कि गज़ल जैसी सशक्त विधा में जीवन की तमाम वास्तविकताओं को मार्मिक ढंग से चित्रित किया जाना चाहिए।

SubQuestion No : 24

Q.24 गज़ल के विदेशी विधा होने के पश्चात् भी हिंदुस्तान में अत्यंत लोकप्रिय होने के पीछे के कारणों के संबंध में असत्य है:

- Ans A. उर्दू गज़ल में जीवन की मिठास, कोमलता, समर्पणशीलता तथा प्रेम आदि की अभिव्यक्ति हुई है जो मनुष्य को मोहित करती है।
- B. हर व्यक्ति में सौंदर्य के प्रति स्वाभाविक ललक होती है और गज़ल सौंदर्यानुभूति से परिपूर्ण विधा है।
- C. गज़ल जिस भाव-संपदा पर आधारित है वह हर देश-काल के मनुष्य की आधारभूत भावनाएँ हैं।
- D. गज़ल मनुष्य को उस निम्न भावभूमि पर ले जाती है जहाँ वे जीवन के सुख-दुःख से मुक्त हो जाता है।

Question ID : 630680177135

Status : Not Answered

Chosen Option : --

Comprehension:

गज़ल उर्दू की सर्वाधिक लोकप्रिय विधा है। उर्दू को यह विधा फारसी से प्राप्त हुई। प्रेमिका से बातचीत के रूप में व्याख्यायित होने के कारण गज़ल का प्रधान विषय प्रेम ही माना गया! इसमें इश्क और हुस्न को ही चित्रित करने की ऐसी परंपरा चली कि दीर्घकाल तक गज़ल केवल महबूब और महबूबा की बेफाई के हसीन ख्यालों, मधु-तिक्त दास्तानों और विचारों से ही समृद्ध होती रही। उर्दू शायरों ने गज़ल का संपूर्ण विषय, तत्संबंधी शब्दावली, अप्रस्तुत विधान आदि सभी चीज़ें फारसी साहित्य से ही ग्रहण कर ली। उर्दू के गज़लकार विदेशी साहित्यिक संपदा के बल पर हिंदुस्तान में अपनी धाक जमाने में इसलिए सफल हुए क्योंकि उनकी गज़लें जिस भाव-संपदा पर आधारित थीं, वह हर देश-काल के मनुष्य की आधारभूत भावनाएँ हैं जिनपर उसकी ज़िंदगी का सुख-दुःख निर्भर करता है। हर व्यक्ति में सौन्दर्य के प्रति स्वाभाविक ललक होती है और हर व्यक्ति में प्रेम करने या किसी का प्रेमास्पद होने की हसरत होती है। उर्दू गज़लों में प्रेम, जीवन की मिठास, कोमलता, समर्पणशीलता, तन्मयता आदि के साथ-साथ विरह की तड़प, उदासी, निराशा, हताशा, प्रतीक्षा, प्रेमिका का अत्याचार, गिला-शिकवा आदि को इतने मार्मिक ढंग से और इतनी विविधता के साथ चित्रित किया गया है कि उनमें हर व्यक्ति को अपनी ज़िंदगी का सुख-दुःख पर्याप्त यथार्थता के साथ मिल जाता है। मौलाना अल्ताफ हुसैन 'हाली' ने गज़ल के वस्तुक्षेत्र को विस्तृत करने के लिए लोगों का ध्यान इस सत्य की ओर आकृष्ट किया कि गज़ल जैसी सशक्त विधा में जीवन की तमाम वास्तविकताओं को मार्मिक ढंग से चित्रित किया जाना चाहिए।

SubQuestion No : 25

Q.25 उर्दू गज़ल को फारसी साहित्य ने किस रूप में प्रभावित नहीं किया?

- Ans A. उसकी संस्कृतनिष्ठ भाषा
- B. उसकी अप्रस्तुत विधान योजना
- C. उसकी विषयवस्तु
- D. तत्संबंधी शब्दावली

Question ID : 630680177133

Status : Not Answered

Chosen Option : --

Q.1 Select the most appropriate option to fill in the blanks.
In its _____ revision to a disease classification manual, the World Health Organization said on Monday that compulsively playing video games now _____ as a new mental health condition. The statement confirmed the _____ of many parents but led some critics to warn that it may risk stigmatising young video players.

- Ans
- A. latest; qualifies; fears
 - B. earliest; introduces; apprehensions
 - C. fastest; labels; dreams
 - D. newest; defines; tears

Question ID : 630680179498
Status : Answered
Chosen Option : B

Q.2 Select the most appropriate adjective to fill in the blank.
Her _____ books were written about indigenous people.

- Ans
- A. early
 - B. then
 - C. ancient
 - D. sooner

Question ID : 630680179502
Status : Answered
Chosen Option : C

Q.3 Choose the option that completes the proverb used in the following sentence.
A chain can only be as strong as its _____, so we must look at the least committed country to see if the alliance will hold.

- Ans
- A. last link
 - B. smallest loop
 - C. final catch
 - D. weakest link

Question ID : 630680179458
Status : Answered
Chosen Option : D

Q.4 Select the most appropriate ANTONYM of the given word.
Figurative

- Ans
- A. Literal
 - B. Colloquial
 - C. Symbolic
 - D. Poetic

Question ID : 630680179444
Status : Answered
Chosen Option : B

Q.5 Select the most appropriate option that conveys the meaning of the words in the brackets to fill in the blanks.

The kingdom of the Greeks is now ____ (to divide a country or an empire into different parts) by them and ____ (to take something away from) of territory.

- Ans
- A. scattered; short
 - B. gone; away
 - C. dismembered; deprived
 - D. small; full

Question ID : 630680177367

Status : Answered

Chosen Option : C

Q.6 Sentences of a paragraph are given below in jumbled order. Arrange the sentences in the correct order to form a meaningful and coherent paragraph.

- (A) Today that dream is over.
- (B) If spending money like water was the answer to our country's problems, we would have no problem now.
- (C) If ever a nation has spent, spent, spent and spent again, ours has.
- (D) All of that money has got us nowhere, but it still has to come from somewhere.

- Ans
- A. ABCD
 - B. BCAD
 - C. DCBA
 - D. BADC

Question ID : 630680177350

Status : Answered

Chosen Option : B

Q.7 Select the most appropriate article to fill in the blank. In case no article is needed, select 'No article needed'.

An hour passes, and not ____ single person is called from the waiting room.

- Ans
- A. No article needed
 - B. the
 - C. an
 - D. a

Question ID : 630680177394

Status : Answered

Chosen Option : D

Q.8 Parts of a sentence are given below in jumbled order. Arrange the parts in the correct order to form a meaningful sentence.

- A. to yourself exactly what it is
- B. until you are ready to admit
- C. that you want
- D. you will experience confusion

Ans A. DCBA

B. DBCA

C. BACD

D. BDCA

Question ID : 630680179467

Status : Answered

Chosen Option : B

Q.9 Select the correct spelling of the word underlined in the given sentence.
You will be embarassed by their hospitality even though they have nothing.

Ans A. Embarrassed

B. Embearased

C. Embarrassed

D. Embarased

Question ID : 630680177345

Status : Answered

Chosen Option : A

Q.10 Select the most appropriate synonym of the given word.
Epicure

Ans A. Treatment

B. Panacea

C. Gourmand

D. Wisdom

INDIA

Question ID : 630680179450

Status : Answered

Chosen Option : A

Q.11 Select the option that expresses the given sentence in active voice.
My most expensive Gucci watch has been stolen.

Ans A. Thieves stole my most expensive Gucci watch.

B. Someone has stolen my most expensive Gucci watch.

C. He stole my Gucci watch which was the most expensive.

D. My Gucci watch, which was the most expensive, was stolen.

Question ID : 630680179472

Status : Answered

Chosen Option : B

Q.12 Select the most appropriate idiom that can substitute the underlined segment given below.
Nirmala stole her mentor's work and published it as her own. This is such a classic case of acting ungratefully.

- Ans
- A. kettle calling the pot black
 - B. biting the hand that feeds you
 - C. stealing the silver
 - D. turn coat

Question ID : 630680177336
Status : Answered
Chosen Option : B

Q.13 Select the most appropriate option that can substitute the underlined segment in the given sentence to make the sentence grammatically correct.
The early decades of the fourth century BCE saw the emergence of an ambitious Macedonian who dreamed of conquering not just the Achaemenid country and whatever lied further east.

- Ans
- A. but whatever laid also
 - B. but also whatever lay
 - C. but whatever also lay
 - D. but also whatever laid to

Question ID : 630680179486
Status : Answered
Chosen Option : D

Q.14 Select the most appropriate option that can substitute the underlined segment in the given sentence.
Your members of a family, national or religious group who lived in the past decided that they must have representation for taxation, many, many years ago.

- Ans
- A. companions
 - B. forefathers
 - C. friends
 - D. neighbours

Question ID : 630680177373
Status : Answered
Chosen Option : B

Q.15 Select the most appropriate present tense of the verb in the brackets to fill in the blank in the sentence below.
Ruth _____ (look) into my eyes, and for a moment, I can see right down into the heart of her.

- Ans
- A. was looking
 - B. look
 - C. looks
 - D. looking

Question ID : 630680177399
Status : Answered
Chosen Option : A

Q.16 Select the correctly spelt word.

- Ans A. Riegn
 B. Hieght
 C. Receive
 D. Seive

Question ID : 630680179462
Status : Answered
Chosen Option : C

Q.17 Select the most appropriate articles to fill in the blanks. In case no article is needed, select 'No article required'.

_____Monday is going to be _____busy day for us.

- Ans A. The; the
 B. The; a
 C. No article required; a
 D. No article required; no article required

Question ID : 630680179512
Status : Answered
Chosen Option : C

Q.18 Select the most appropriate option that conveys the meaning of the words in the brackets to fill in the blanks.

But can a _____ (a formal talk given usually to a large number of people on a special occasion), however _____ (likely to be remembered or worth remembering), change history?

- Ans A. song; sweet
 B. speech; memorable
 C. poem; musical
 D. inspiration; great

Question ID : 630680177357
Status : Answered
Chosen Option : B

Q.19 Select the appropriate option to fill in the blanks.

Twice a week, two team members _____an entire day _____to 100 restaurants and three hospitals around Singapore picking up our trash-hundreds of thousands of used chopsticks.

- Ans A. spended; travel
 B. spend; travelling
 C. spent; travelled
 D. spending; were travelling

Question ID : 630680179519
Status : Answered
Chosen Option : B

Q.20 Select the most appropriate verbs to fill in the blanks.

They _____ their destination, but they did not want to _____ the man that awaited them.

- Ans
- A. approach; be encountering
 - B. approached; encountered
 - C. had approached; be encounter
 - D. were approaching; encounter

Question ID : 630680179504

Status : Answered

Chosen Option : D

Comprehension:

Read the given passage and answer the questions that follow.

A man brought from town five of the finest peaches that were to be had. His children had never seen this fruit; therefore, they were highly delighted to see the beautiful peaches with their red cheeks and delicate bloom.

The father gave one to each of his four boys, and one to their mother. In the evening, just before the children went to bed, he asked them, "Well, how did you like the nice peaches?" "Very much, indeed," said the oldest boy. "It is a delicious fruit, delicate, with a luscious flavor. I have taken care of the stone so as to grow a tree." "Well done," answered the father. "It is the duty of a good person to be economical and to think of the future." "I ate mine up," exclaimed the young twins in unison, "Well," said the father, "you still have time in life to become prudent." Then another son began: "I sold my own peach and received so much money for it that I may buy a dozen when I go to town." The father asked Shirish, who answered: "I took my peach to the son of our neighbor, sick Gaurav, who has the fever. He would not take it, so I put it down on his bed and went away." "Well," said the father, "who has made the best use of his peach?". Then all the boys exclaimed: "Brother!" Shirish was silent, and his mother embraced him with tears in her eyes.

SubQuestion No : 21

Q.21 What is the central theme of this passage?

- Ans
- A. A loving neighbour is the best gift to anyone.
 - B. The best way to live life and all that it offers is by helping others.
 - C. Different people have different ideas of happiness.
 - D. There are different ways in which one thing can be used.

Question ID : 630680179542

Status : Answered

Chosen Option : C

Comprehension:

Read the given passage and answer the questions that follow.

A man brought from town five of the finest peaches that were to be had. His children had never seen this fruit; therefore, they were highly delighted to see the beautiful peaches with their red cheeks and delicate bloom.

The father gave one to each of his four boys, and one to their mother. In the evening, just before the children went to bed, he asked them, "Well, how did you like the nice peaches?" "Very much, indeed," said the oldest boy. "It is a delicious fruit, delicate, with a luscious flavor. I have taken care of the stone so as to grow a tree." "Well done," answered the father. "It is the duty of a good person to be economical and to think of the future."

"I ate mine up," exclaimed the young twins in unison, "Well," said the father, "you still have time in life to become prudent." Then another son began: "I sold my own peach and received so much money for it that I may buy a dozen when I go to town."

The father asked Shirish, who answered: "I took my peach to the son of our neighbor, sick Gaurav, who has the fever. He would not take it, so I put it down on his bed and went away." "Well," said the father, "who has made the best use of his peach?"

Then all the boys exclaimed: "Brother!" Shirish was silent, and his mother embraced him with tears in her eyes.

SubQuestion No : 22

Q.22 Which of the following cannot be inferred from the passage?

- Ans A. The boy's mother also got to eat a peach
- B. The father wanted to bring joy to the boys, so he got them peaches.
- C. The oldest boy was mindful about the future
- D. The family in this story was a poor family.

Question ID : 630680179545

Status : Answered

Chosen Option : D

Comprehension:

Read the given passage and answer the questions that follow.

A man brought from town five of the finest peaches that were to be had. His children had never seen this fruit; therefore, they were highly delighted to see the beautiful peaches with their red cheeks and delicate bloom.

The father gave one to each of his four boys, and one to their mother. In the evening, just before the children went to bed, he asked them, "Well, how did you like the nice peaches?" "Very much, indeed," said the oldest boy. "It is a delicious fruit, delicate, with a luscious flavor. I have taken care of the stone so as to grow a tree." "Well done," answered the father. "It is the duty of a good person to be economical and to think of the future."

"I ate mine up," exclaimed the young twins in unison, "Well," said the father, "you still have time in life to become prudent." Then another son began: "I sold my own peach and received so much money for it that I may buy a dozen when I go to town."

The father asked Shirish, who answered: "I took my peach to the son of our neighbor, sick Gaurav, who has the fever. He would not take it, so I put it down on his bed and went away." "Well," said the father, "who has made the best use of his peach?"

Then all the boys exclaimed: "Brother!" Shirish was silent, and his mother embraced him with tears in her eyes.

SubQuestion No : 23

Q.23 Which of the following summarises the passage in one sentence?

- Ans A. A family ate a new fruit, so they used its seed in different ways, showing different ideas, and all agreed that Shirish put it to the best use and they should have thought that too.
- B. The father of 4 boys got peaches from the town to test his sons, and Shirish was the winner as everyone voted for him.
- C. The father brought peaches for the family, who enjoyed the fruit, but Shirish did not eat it as he gave it away to the sick neighbour.
- D. Four boys who had never had peaches were given the fruit by their father, and they all used the fruits in different ways, although Shirish did not eat his as he gave it to Gaurav, which all thought to be the best use of the fruit.

Question ID : 630680179544

Status : Answered

Chosen Option : D

Comprehension:

Read the given passage and answer the questions that follow.

A man brought from town five of the finest peaches that were to be had. His children had never seen this fruit; therefore, they were highly delighted to see the beautiful peaches with their red cheeks and delicate bloom.

The father gave one to each of his four boys, and one to their mother. In the evening, just before the children went to bed, he asked them, "Well, how did you like the nice peaches?" "Very much, indeed," said the oldest boy. "It is a delicious fruit, delicate, with a luscious flavor. I have taken care of the stone so as to grow a tree." "Well done," answered the father. "It is the duty of a good person to be economical and to think of the future."

"I ate mine up," exclaimed the young twins in unison, "Well," said the father, "you still have time in life to become prudent." Then another son began: "I sold my own peach and received so much money for it that I may buy a dozen when I go to town."

The father asked Shirish, who answered: "I took my peach to the son of our neighbor, sick Gaurav, who has the fever. He would not take it, so I put it down on his bed and went away." "Well," said the father, "who has made the best use of his peach?"

Then all the boys exclaimed: "Brother!" Shirish was silent, and his mother embraced him with tears in her eyes.

SubQuestion No : 24

Q.24 Who planted the peach using its seed/stone?

- Ans
- A. The twins
 - B. Shirish
 - C. The father
 - D. The oldest son

Question ID : 630680179543

Status : Answered

Chosen Option : D

Comprehension:

Read the given passage and answer the questions that follow.

A man brought from town five of the finest peaches that were to be had. His children had never seen this fruit; therefore, they were highly delighted to see the beautiful peaches with their red cheeks and delicate bloom.

The father gave one to each of his four boys, and one to their mother. In the evening, just before the children went to bed, he asked them, "Well, how did you like the nice peaches?" "Very much, indeed," said the oldest boy. "It is a delicious fruit, delicate, with a luscious flavor. I have taken care of the stone so as to grow a tree." "Well done," answered the father. "It is the duty of a good person to be economical and to think of the future."

"I ate mine up," exclaimed the young twins in unison, "Well," said the father, "you still have time in life to become prudent." Then another son began: "I sold my own peach and received so much money for it that I may buy a dozen when I go to town."

The father asked Shirish, who answered: "I took my peach to the son of our neighbor, sick Gaurav, who has the fever. He would not take it, so I put it down on his bed and went away." "Well," said the father, "who has made the best use of his peach?"

Then all the boys exclaimed: "Brother!" Shirish was silent, and his mother embraced him with tears in her eyes.

SubQuestion No : 25

Q.25 Which of the following words can replace the word 'prudent' in the passage?

- Ans
- A. Practical
 - B. Judicious
 - C. Organised
 - D. Respectful

Question ID : 630680179546

Status : Answered

Chosen Option : B

Q.1 Which of the following Harappan cities had massive reservoirs that were used for storing fresh water brought by rains or to store water diverted from two nearby rivulets?

- Ans A. Lothal
 B. Dholavira
 C. Ganeriwala
 D. Kalibangan

Question ID : 630680177462
Status : Answered
Chosen Option : A

Q.2 Which of the following statements is NOT correct?

- Ans A. There is a constitutional requirement in India to present before the Parliament a statement of estimated receipts and expenditures of the government in respect of every financial year.
 B. Article 114 mentions the constitutional requirement of the presentation of the budget every financial year.
 C. The budget comprises of the Revenue Budget and the Capital Budget.
 D. The financial year runs from 1 April to 31 March.

Question ID : 630680182897
Status : Answered
Chosen Option : B

Q.3 According to the Global Multidimensional Poverty Index 2022, around _____ people in India climbed out of poverty between 2005-06 and 2019-21.

- Ans A. 415 million
 B. 315 million
 C. 515 million
 D. 215 million

INDIA

Question ID : 630680182859
Status : Answered
Chosen Option : B

Q.4 Which of the following statements is correct/incorrect with respect to bonds?

- i. Bonds are papers bearing the promise of a future stream of monetary returns over a certain period of time.
ii. These papers are issued by governments or firms for borrowing money from the public and they are tradable in the market.

- Ans A. Both Option i and Option ii are correct.
 B. Both Option i and Option ii are incorrect.
 C. Only Option i is correct.
 D. Only Option ii is correct.

Question ID : 630680182899
Status : Answered
Chosen Option : A

Q.5 Who of the following is NOT related to the ghazal singing?

- Ans A. Ghulam Ali
 B. Jagjit Singh
 C. Mehndi Hasan
 D. Haribhai Varadkari

Question ID : 630680182892
Status : Answered
Chosen Option : D

Q.6 Bryophytes are plants which are dependent on _____ for sexual reproduction.

- Ans A. air
 B. insects
 C. soil
 D. water

Question ID : 630680182925
Status : Answered
Chosen Option : D

Q.7 In which year did NABARD come into existence by transferring the agricultural credit functions of RBI and refinance functions of the then Agricultural Refinance and Development Corporation (ARDC)?

- Ans A. 12 July 1980
 B. 12 July 1978
 C. 12 July 1982
 D. 12 July 1976

Question ID : 630680179696
Status : Answered
Chosen Option : C

Q.8 Which state in India has registered 917 females per 1000 males in 2022?

- Ans A. Rajasthan
 B. Punjab
 C. Haryana
 D. Uttar Pradesh

Question ID : 630680182915
Status : Answered
Chosen Option : A

Q.9 Who discovered the phenomenon of neutron-induced fission of uranium, which would serve as the basis of nuclear power reactors and nuclear weapons?

- Ans A. Neil Bohr
 B. J J Thomson
 C. Hahn and Meitner
 D. Einstein

Question ID : 630680179720
Status : Answered
Chosen Option : C

Q.10 What was the original name of Swami Vivekananda, who combined the simple teachings of Sri Ramakrishna with his well-founded modern outlook and spread them all over the world?

- Ans A. Vishwanath Das
 B. Narendra Kumar
 C. Vishwanath Dutta
 D. Narendra Nath Dutta

Question ID : 630680179671
Status : Answered
Chosen Option : D

Q.11 Under the Jurisdiction of the Supreme court of India, if a Dispute occurs between Union and States, it will solve under which type of the following Jurisdictions?

- Ans A. Advisory
 B. Original
 C. Writ
 D. Appellate

INDIA

Question ID : 630680179737
Status : Answered
Chosen Option : D

Q.12 Charter Act of 1813 does NOT mention which of the following provisions?

- Ans A. It empowered the Local Governments in India to impose taxes on persons and to punish those who did not pay them.
 B. The Charter act of 1813 ended the monopoly of the East India Company in India, the company's monopoly in trade with China and trade in tea with India was kept intact.
 C. The act granted permission to the persons who wished to go to India for promoting moral and religious improvements
 D. There was also a provision that the Company should invest ₹5 lakh every year on the education of Indians.

Question ID : 630680182874
Status : Answered
Chosen Option : A

Q.13 'JAGA Mission', which received the UN-Habitat World Habitat Award 2023' for the second time, is related to which state?

- Ans
- A. Tamil Nadu
 - B. Rajasthan
 - C. Bihar
 - D. Odisha

Question ID : 630680179652

Status : Answered

Chosen Option : D

Q.14 Which is NOT correct about provisions under Article 15 of the Constitution of India?

- Ans
- A. There is no special provision for women and children under this article.
 - B. No restriction to the use of wells, tanks, bathing ghats, roads and places of public resort maintained wholly or partly out of State funds or dedicated to the use of the general public.
 - C. No citizen shall, on grounds only of religion, race, caste, sex, place of birth or any of them, be subject to any disability, liability, restriction or condition with regard to-(a) access to shops, public restaurants, hotels and places of public entertainment.
 - D. The State shall not discriminate against any citizen on grounds only of religion, race, caste, sex, place of birth or any of them.

Question ID : 630680182937

Status : Answered

Chosen Option : A

Q.15 Which of the following is NOT included in the Union List?

- Ans
- A. Foreign affairs
 - B. Atomic energy
 - C. Prisons
 - D. Defence

INDIA

Question ID : 630680182939

Status : Answered

Chosen Option : C

Q.16 Which of the following statements is correct/incorrect with respect to the Kuchipudi dance form?

- i. Kuchipudi, one of the major dance forms of India was originated from Andhra Pradesh.
- ii. Kuchipudi grew largely as a product of Bhakti movement beginning in the 9th Century AD.

- Ans
- A. Only Option i is correct.
 - B. Both Option i and Option ii are correct.
 - C. Only Option ii is correct.
 - D. Both Option i and Option ii are incorrect.

Question ID : 630680182884

Status : Answered

Chosen Option : B

Q.17 Thermal energy is the energy of a body arising from the motion of its atoms or molecules. It is directly proportional to the _____ of the substance.

- Ans
- A. weight
 - B. speed
 - C. temperature
 - D. mass

Question ID : 630680182931
Status : Answered
Chosen Option : D

Q.18 Which of the following is correct/incorrect with regards to the Hindustani music?

- i. Hindustani music is based on the raga system.
- ii. The form of the raga is determined by the particular pattern of ascent and descent of the notes, which needs to be strictly linear.

- Ans
- A. Both Option i and Option ii are correct.
 - B. Only Option ii is correct.
 - C. Both Option i and Option ii are incorrect.
 - D. Only Option i is correct.

Question ID : 630680182888
Status : Answered
Chosen Option : A

Q.19 उत्तर भारत के मैदानी इलाकों में हुई तत्काल आवश्यक शीतकालीन वर्षा और पहाड़ों में बर्फबारी को स्थानिक द्वारा _____ कहा जाता है।

- Ans
- A. महावत
 - B. सौगात
 - C. प्रसाद
 - D. आशीर्वाद

INDIA

Question ID : 630680182914
Status : Answered
Chosen Option : B

Q.20 Which sport does Nikhat Zareen play?

- Ans
- A. Athletics
 - B. Wrestling
 - C. Badminton
 - D. Boxing

Question ID : 630680182863
Status : Answered
Chosen Option : D

Q.21 Which of the following is/are correct/incorrect with respect to writings on Akbar?

- i. Abul Fazal wrote a three-volume history of Akbar's reign, titled Akbar Nama.
- ii. The third volume is the Ain-i-Akbari, which deals with Akbar's ancestors.

- Ans
- A. Both option i and Option ii are incorrect.
 - B. Only option ii is correct.
 - C. Both option i and Option ii are correct.
 - D. Only option i is correct.

Question ID : 630680182870
Status : Answered
Chosen Option : A

Q.22 Which is the poorest state of India as of 2022?

- Ans
- A. Chhattisgarh
 - B. Bihar
 - C. Assam
 - D. Uttar Pradesh

Question ID : 630680182853
Status : Answered
Chosen Option : B

Q.23 How much solar power installed capacity has reached India as of November 2022, according to the report of the Government of India?

- Ans
- A. 76.97 GW
 - B. 65.97 GW
 - C. 55.97 GW
 - D. 61.97 GW

INDIA

Question ID : 630680182919
Status : Answered
Chosen Option : A

Q.24 Goa has ____ deposits.

- Ans
- A. lime-stone
 - B. aluminium
 - C. coal
 - D. iron ore

Question ID : 630680182908
Status : Answered
Chosen Option : B

Q.25 Which of the following institutions won the Digital India Award 2022–Gold?

- Ans A. Central Board of Secondary Education
 B. University Grants Commission
 C. National Council for Educational Research and Training
 D. Central Advisory Board on Education

Question ID : 630680182850
Status : Answered
Chosen Option : A

Section : General Intelligence

Q.1 Four letter-clusters have been given, out of which three are alike in some manner and one is different. Select the one that is different.

- Ans A. RTQR
 B. EGCD
 C. SUQR
 D. VXTU

Question ID : 630680182792
Status : Answered
Chosen Option : A

Q.2 A group of numbers and symbols is coded using letter codes as per the table given below and the conditions that follow. Study the given codes and conditions and answer the question that follows.

Numbers/symbols	*	2	@	9	^	+	7	#	%	8
Letter codes	J	P	A	F	D	N	R	K	M	Z

Conditions

- (i) If the first and last elements are symbols, the codes for these two (the first and the last elements) are to be interchanged.
(ii) If the first element is an odd number and the last, an even number, the first and last elements are to be coded as 'B'.

What will be the code for the following group?

% 2 @ 9 @ ?

- Ans A. APMFM
 B. APAFM
 C. MPAFA
 D. APADA

Question ID : 630680182774
Status : Answered
Chosen Option : C

Q.3 Select the letter from among the given options that can replace the question mark (?) in the following series.

R, B, U, C, X, D, ?

- Ans
- A. Z
 - B. A
 - C. B
 - D. E

Question ID : 630680182759
Status : Answered
Chosen Option : B

Q.4 उस विकल्प का चयन करें जो तीसरे पद से उसी प्रकार संबंधित है जिस प्रकार दूसरा पद पहले पद से संबंधित है।

(शब्दों को सार्थक हिंदी शब्द माना जाना चाहिए और शब्द में अक्षरों की संख्या की संख्या/व्यंजनों/स्वरों की संख्या के आधार पर एक दूसरे से संबंधित नहीं किया जाना चाहिए।)

मगरमच्छ : सरीसृप :: टोड : ?

- Ans
- A. मेढक
 - B. स्तनधारी
 - C. कृतक
 - D. उभयचर

Question ID : 630680182789
Status : Answered
Chosen Option : D

Q.5 Select the number from among the given options that can replace the question mark (?) in the following series.

4096, 1024, 512, 128, 64, ?

- Ans
- A. 12
 - B. 16
 - C. 8
 - D. 32

Question ID : 630680182816
Status : Answered
Chosen Option : B

Q.6 What approximate value should come in place of the question mark (?) in the following equation?

$$34.89 \div 7.12 \times 4.02 + 9.92 - 15.11 = ?$$

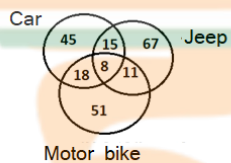
- Ans**
- A. 10
 - B. 18
 - C. 15
 - D. 30

Question ID : 630680182825

Status : Answered

Chosen Option : C

Q.7 Study the given diagram carefully and answer the question that follows. The numbers in different sections indicate the number of persons with different means of transport.



How many such persons are there who have either only car or only jeep as their means of transport?

- Ans**
- A. 96
 - B. 51
 - C. 112
 - D. 45

Question ID : 630680182754

Status : Answered

Chosen Option : C

Q.8 Four letter triads have been given, out of which three are alike in some manner and one is different. Select the one that is different.

- Ans**
- A. A-E-I
 - B. I-O-U
 - C. E-I-O
 - D. E-O-U

Question ID : 630680182797

Status : Answered

Chosen Option : D

Q.9 If in a certain code language, 'LAWYER' is written as 'ALYWRE', and 'LEGACY' is written as 'ELAGYC'. How will 'LEAGUE' be written in that language?

- Ans**
- A. EUGAEL
 - B. ELAGEU
 - C. ELAUGE
 - D. ELGAEU

Question ID : 630680182770
Status : Answered
Chosen Option : D

Q.10 Which two signs should be interchanged to make the following equation correct?

$$[{\{(65 - 25) + (2 \div 4)\}} \times (2 \div 8)] \div 2 = 6$$

- Ans**
- A. + and -
 - B. + and \div
 - C. \times and \div
 - D. \times and +

Question ID : 630680182830
Status : Answered
Chosen Option : C

Q.11 5 girls K, O, V, T, and S are sitting around a circle facing the centre. T sits exactly between O and K. V sits exactly between K and S. Who is sitting in between V and O?

- Ans**
- A. T
 - B. U
 - C. S
 - D. K

Question ID : 630680176390
Status : Answered
Chosen Option : C

Q.12 Identify the number that does NOT belong to the following series.

1, 1, 2, 8, 3, 27, 4, 65, 5, 125

- Ans**
- A. 27
 - B. 8
 - C. 125
 - D. 65

Question ID : 630680173454
Status : Answered
Chosen Option : D

Q.13 Pointing to an old woman Akshay said, "Her son is my son's uncle". How is the old woman related to Akshay?

- Ans
- A. Father
 - B. Brother
 - C. Sister
 - D. Uncle

Question ID : 630680176442
Status : Answered
Chosen Option : D

Q.14 Ridhi starts walking towards the west. After walking 30 m, he turns left and walks 40 m. He takes another left turn and walks 50 m. Finally, he turns left once again and walks further 40 m to reach a cybercafe. How far is the cybercafe from his starting point, and in which direction is it with respect to the starting point?

- Ans
- A. 50 m due east
 - B. 100 m due west
 - C. 20 m due west
 - D. 20 m due east

Question ID : 630680182778
Status : Answered
Chosen Option : D

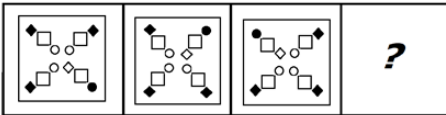
Q.15 Each vowel in the word ASSERTIVE is changed to the letter following it in the English alphabetical order, and each consonant is changed to the letter preceding it in the English alphabetical order. If each letter thus formed is arranged in the alphabetical order, which letter will be second from the right?

- Ans
- A. S
 - B. F
 - C. R
 - D. U

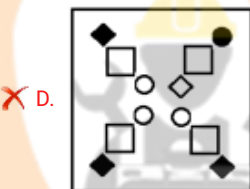
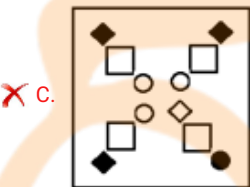
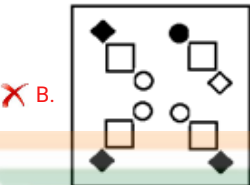
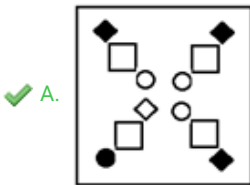
INDIA

Question ID : 630680182763
Status : Answered
Chosen Option : A

Q.16 Select the figure from among the given options that can replace the question mark (?) in the following series.



Ans



Question ID : 630680182799

Status : Answered

Chosen Option : A

Q.17 Refer to the given number-symbol series and answer the question that follows.

(Left) @ 4 3 4 % † 5 ¥ 2 @ 1 # 2 % 5 @ 1 & 5 1 # 5 # 2 7 5 £ (Right)

How many such numbers are there that are immediately followed by a number and also immediately preceded by a symbol?

- Ans
- ✗ A. 2
 - ✗ B. 4
 - ✗ C. 1
 - ✓ D. 3

Question ID : 630680182766

Status : Answered

Chosen Option : D

Q.18 Six presidents with the initials H, G, J, K, L and M, not necessarily in the same order, are sitting around a circular table, facing the centre and at equal distance from each other.


G is sitting exactly between K and J. L is sitting exactly between M and H. K is sitting to the immediate right of M. H is sitting to the immediate right of J. Who is sitting second to the left of H?

- Ans**
- A. G
 - B. L
 - C. K
 - D. J

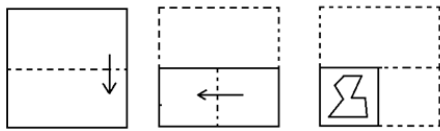
Question ID : 630680182738

Status : Answered

Chosen Option : A




Q.19 The sequence of folding a piece of paper and the manner in which the folded paper is cut is shown in the following figures. How would this paper look when unfolded?

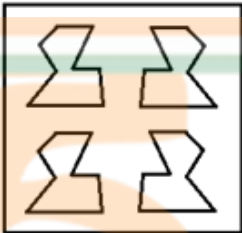


Ans

A.



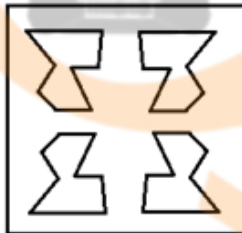
B.



C.



D.

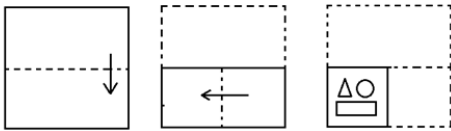


Question ID : 630680182813

Status : Answered

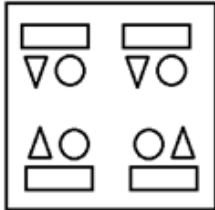
Chosen Option : D

Q.20 The sequence of folding a piece of paper and the manner in which the folded paper is cut is shown in the following figures. How would this paper look when unfolded?

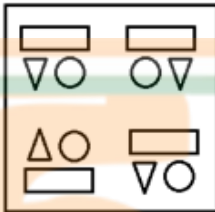


Ans

A.



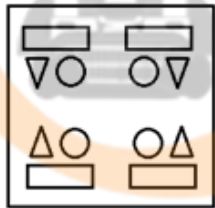
B.



C.

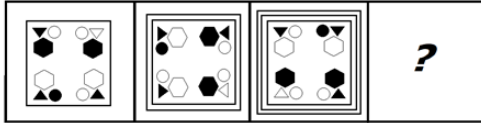


D.



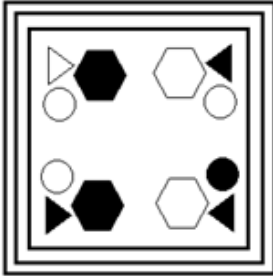
Question ID : 630680182812
 Status : Answered
 Chosen Option : D

Q.21 Select the figure from among the given options that can replace the question mark (?) in the following series.



Ans

✗ A.



✗ B.



✓ C.



✗ D.



INDIA

Question ID : 630680182804

Status : Answered

Chosen Option : A

Q.22 If

'Z Ø K' means 'Z is the father of K',

'Z * K' means 'Z is the mother of K',

'Z & K' means 'Z is the brother of K's mother',

'Z + K' means 'Z is the wife of K' and

'Z % K' means 'Z is the husband of K',

then how is P related to C in the following expression?

$C + J \text{Ø} L \% M * P$

- Ans
- A. Brother's child
 - B. Son
 - C. Daughter's husband
 - D. Son's child

Question ID : 630680182782

Status : Answered

Chosen Option : D

Q.23 In a queue of 50 passengers, waiting before the ticket counter, A is 20th from the back end and B is 22th from the front end. How many passengers are there between A and B?

- Ans
- A. 6
 - B. 7
 - C. 8
 - D. 9

Question ID : 630680182747

Status : Answered

Chosen Option : C

Q.24 Seven patients have an appointment with an eye doctor on a different day of the week. U has an appointment on Thursday. Two patients are between Z and U. A has an appointment on Tuesday. A is between K and M. W is having an appointment the next day of U. 5 people have an appointment between K and Z. Who has an appointment on Monday?

- Ans
- A. U
 - B. K
 - C. M
 - D. A

Question ID : 630680176402

Status : Answered

Chosen Option : B

Q.25 Read the given data and answer the question that follows.

- Sunil is older than Saman and Renu.
- Renu is younger than Radha and Gauri.
- Bina is older than Radha but younger than Sunil.
- Sunil is not the oldest and Renu is not the youngest.

Who is the oldest among them?

Ans A. Gauri

B. Saman

C. Radha

D. Bina

Question ID : 630680177585

Status : Answered

Chosen Option : A

Section : Quantitative Aptitude

Q.1 If $(1, 3, -3)$, $(2, 0, 5)$, $(-6, 3, 7)$ are the midpoints of the sides of a triangle, find the centroid.

Ans A. $(-1, 3, 1)$

B. $(1, 0, 2)$

C. $(-1, 2, 3)$

D. $(0, 2, 3)$

Question ID : 630680179638

Status : Answered

Chosen Option : C

Q.2 A gardener had some plants for planting. He tried planting them in rows of 7, 8, 9 and 12. But he always had one plant left. When he tried to plant 11 in a row, he had none left. Find the minimum number of plants with the gardener.

Ans A. 1804

B. 3025

C. 506

D. 4631

Question ID : 630680179556

Status : Answered

Chosen Option : B

Q.3 The length of a rectangle is increased by 25%, whereas the breadth is reduced by 10%. What will be the percentage change in the area?

- Ans**
- A. Decrease by 12.5%
 - B. Increase by 12.5%
 - C. Increase by 15%
 - D. Decrease by 15%

Question ID : 630680179569
Status : Answered
Chosen Option : B

Q.4 If z varies as $px - 2y$, and $z = 5$ when $x = 3$ and $y = 2$, and $z = 6$ when $x = 4$ and $y = 3$, find p .

- Ans**
- A. 2
 - B. 3
 - C. 1
 - D. 4

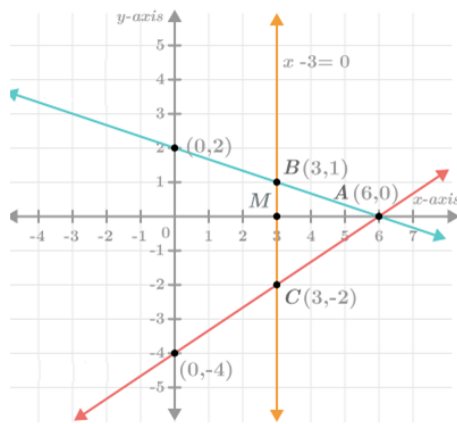
Question ID : 630680179586
Status : Answered
Chosen Option : B

Q.5 A can finish a work in 9 days, while B can finish the same work in 18 days. They set to complete the work together, but after 2 days, B quits and A completes the work alone. The wages for completion of the work is ₹13,500, find A's share (in ₹).

- Ans**
- A. 11,500
 - B. 10,000
 - C. 9,000
 - D. 12,000

Question ID : 630680179605
Status : Answered
Chosen Option : D

Q.6 For the graph given below, select the system of equations whose graph it is from the options given below



- Ans
- A. $x + 3y + 6 = 0, 2x - 3y + 12 = 0, x = -3$
 - B. $x + 3y - 6 = 0, 2x + 3y - 12 = 0, x = -3$
 - C. $x + 3y + 6 = 0, 2x - 3y - 12 = 0, x = 3$
 - D. $x + 3y - 6 = 0, 2x - 3y - 12 = 0, x = 3$

Question ID : 630680178028

Status : Not Attempted and Marked For Review

Chosen Option : --

Q.7 The following table shows the sales of five products in thousand units during two years 2019 and 2020.

Find the difference in sales of soaps branded Kiril, Tux and Hama in 2020 to Nexona and Antoor in 2019

Soap	2019	2020
Tux	123	87
Hama	98	109
Kiril	95	72
Nexona	105	132
Antoor	99	65

- Ans
- A. 1,19,000 units
 - B. 64,000 units
 - C. 87,000 units
 - D. 51,000 units

Question ID : 630680179613

Status : Answered

Chosen Option : B

Q.8 The sides of a triangle are in the ratio 3 : 5 : 6. If the area is $8\sqrt{14}$ cm², find the sum of the sides(in cm).

- Ans**
- A. 24
 - B. 32
 - C. 36
 - D. 28

Question ID : 630680179629

Status : **Not Attempted and Marked For Review**

Chosen Option : --

Q.9 The perimeter of a right-angle triangle is 120 cm and its two perpendicular sides are in the ratio 5 : 12. Find the area of the triangle (in cm²).

- Ans**
- A. 480
 - B. 448
 - C. 424
 - D. 464

Question ID : 630680179625

Status : **Answered**

Chosen Option : A

Q.10 The salaries of Ram and Raghu are in the ratio 2 : 3. If Ram's salary is 4,000 less than Raghu's salary, then Raghu's salary is:

- Ans**
- A. 12,500
 - B. 10,500
 - C. 12,000
 - D. 11,500

INDIA

Question ID : 630680177984

Status : **Answered**

Chosen Option : C

Q.11 If the length of the arc of a circle is 7 units, find the area of the sector where the radius of the circle is 15 units.

- Ans**
- A. 57.2
 - B. 50.0
 - C. 55.4
 - D. 52.5

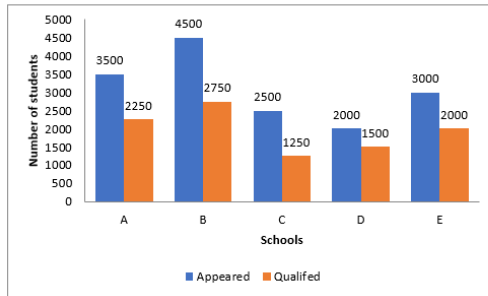
Question ID : 630680179636

Status : **Not Attempted and Marked For Review**

Chosen Option : --

Q.12 Study the following graph carefully and answer the questions given below.

Total number of students appeared and qualified from various schools at a scholarship exam.



What is the ratio of the number of students appeared to the number of students qualified at the scholarship exam from school B and D?

- Ans**
- A. 11 : 18
 - B. 17 : 26
 - C. 18 : 11
 - D. 26 : 17

Question ID : 630680178017

Status : **Not Attempted and Marked For Review**

Chosen Option : --

Q.13 A train overtakes two persons walking along the tracks in 9.3 seconds and 9.4 seconds, respectively. The speeds of the persons walking in the same direction as the train is 4.5 km/h and 5.4 km/h, respectively. What is the speed of the train (in km/h)?

- Ans**
- A. 89.1
 - B. 95.4
 - C. 93.2
 - D. 91.7

INDIA

Question ID : 630680179596

Status : **Answered**

Chosen Option : A

Q.14 Shiva buys an article for ₹2,850 in cash and sells it for ₹3,600 at a credit of one year. If the rate of interest is 15% per annum, how much does he gain (in ₹)? (correct up to one decimal place)

- Ans**
- A. 280.4
 - B. 268.2
 - C. 276.8
 - D. 270.6

Question ID : 630680177979

Status : **Not Answered**

Chosen Option : --

Q.15 Geetha's office is $4\frac{1}{2}$ km away from her home. She takes 25 minutes to cycle to her office and 29 minutes to cycle back. Find her average speed (in km/h).

- Ans**
- A. 20
 - B. 15
 - C. 12
 - D. 10

Question ID : 630680179558
Status : Answered
Chosen Option : D

Q.16 On selling a book for ₹144 a seller loses $\frac{1}{7}$ of the cost. If he sold the book for ₹193.20, his gain/loss percentage is:

- Ans**
- A. 15% gain
 - B. 12% loss
 - C. 14% loss
 - D. 13% gain

Question ID : 630680179574
Status : Answered
Chosen Option : D

Q.17 P can do $\frac{3}{5}$ of a work in $12\frac{3}{5}$ days and Q can complete the work alone in 42 days. If P and Q work alternately, how many days will it take for them to finish the work?

- Ans**
- A. 35
 - B. 24
 - C. 28
 - D. 21

INDIA

Question ID : 630680179608
Status : Answered
Chosen Option : C

Q.18 Two trains of equal length, running at speeds of 120 km/h and 100 km/h, respectively, are running on parallel tracks in the same direction. The faster train crosses the slower train in 45 seconds, the length of each train (in metres) is:

- Ans**
- A. 160
 - B. 150
 - C. 125
 - D. 140

Question ID : 630680179600
Status : Answered
Chosen Option : C

Q.19 By which smallest number should 588 be multiplied to get a perfect square?

- Ans
- A. 7
 - B. 3
 - C. 6
 - D. 2

Question ID : 630680179548
Status : Answered
Chosen Option : B

Q.20 The compound interest on ₹4,500 for two years at the rate of 30% for the first year and 40% for the second year will be:

- Ans
- A. ₹8,190
 - B. ₹3,690
 - C. ₹4,690
 - D. ₹9,000

Question ID : 630680182975
Status : Answered
Chosen Option : B

Q.21 A certain sum becomes 3 times itself in 10 years at a certain SI p.a. In how many years will it become 10 times itself at the same simple interest rate p.a?

- Ans
- A. 42
 - B. 40
 - C. 45
 - D. 35



INDIA

Question ID : 630680177993
Status : Answered
Chosen Option : D

Q.22 Factorise $8(a + b)^2 + 10(a + b) - 7$.

- Ans
- A. $(2a - 2b + 1)(2a - 2b + 4)$
 - B. $(4a + 4b + 7)(2a + 2b - 1)$
 - C. $(3a - 3b + 2)(2a + 2b + 3)$
 - D. $(3a + 3b - 4)(a + b + 3)$

Question ID : 630680179619
Status : Answered
Chosen Option : B

Q.23 $2.\overline{53} + 1.0\overline{46} + 0.4\overline{9}$ is equal to :

- Ans
- A. $3.0\overline{81}$
 - B. $5.0\overline{51}$
 - C. $4.0\overline{81}$
 - D. $4.0\overline{51}$

Question ID : 630680184608
Status : Answered
Chosen Option : D

Q.24 A runner is running around a circular path of radius 3.5 m. If he runs two full rounds and one reverse full round in 120 seconds, find the average speed (in km/h).

- Ans
- A. 2.82
 - B. 1.24
 - C. 2.36
 - D. 1.98

Question ID : 630680179565
Status : Answered
Chosen Option : D

Q.25 There are 2800 students in a school, out of which 75% participate in a sports competition. Out of those who participate, 60% are boys. 35% of the boys and 25% of the girls qualify for the final round of the competition. What percentage of the school will participate in the final round?

- Ans
- A. $20\frac{1}{3}\%$
 - B. $21\frac{3}{4}\%$
 - C. $22\frac{1}{2}\%$
 - D. $23\frac{1}{4}\%$

Question ID : 630680179573
Status : Answered
Chosen Option : B